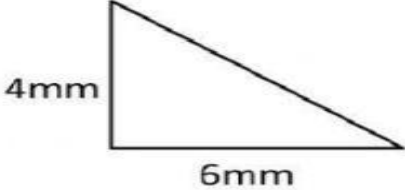
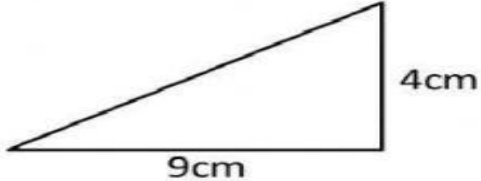
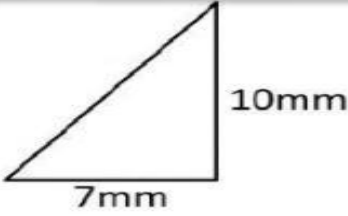
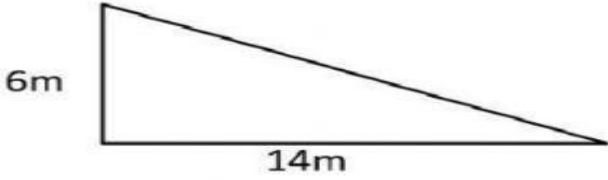
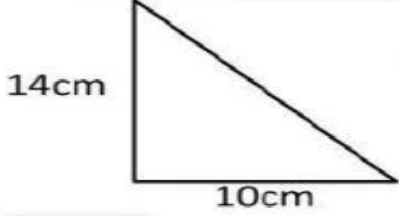
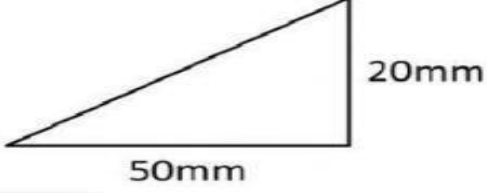


Second Semester of the Academic Year 1447

Worksheet for Week 15

Name			
Subject	Math	Class	Grade 6

Q1: find the area of each triangle ($A = \frac{1}{2}bh$):

<p>1)</p>  <p>Area = <input type="text"/> mm²</p>	<p>2)</p>  <p>Area = <input type="text"/> cm²</p>
<p>3)</p>  <p>Area = <input type="text"/> mm²</p>	<p>4)</p>  <p>Area = <input type="text"/> m²</p>
<p>5)</p>  <p>Area = <input type="text"/> cm²</p>	<p>6)</p>  <p>Area = <input type="text"/> mm²</p>

Q2: Solve the word problem :

1. Find the area of a triangle with base = 3 cm, and height = 5 ?

.....
