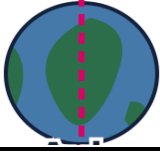




Second Semester of the Academic Year 1447-2025




Worksheet (9)

Level	2	Name	
Subject	Science	Class	

First: Match the correct number with the letter then highlight the correct answer.

No.	Q.	A.	Highlight the correct answer
1	Rotation (The spinning movement of the Earth)	A 	<input type="checkbox"/> A <input type="checkbox"/> B <input type="checkbox"/> C
2	Axis (The imaginary line through the center of the Earth)	B 	<input type="checkbox"/> A <input type="checkbox"/> B <input type="checkbox"/> C
3	The amount of time it takes for the Earth to make one full turn.	C 	<input type="checkbox"/> A <input type="checkbox"/> B <input type="checkbox"/> C

Second: Read the sentences. Write (T) if it is True. Write (F) if it is False.

Sentence	True (T) or False (F)
 1. We can easily feel the Earth spinning when we stand still.	
 2. The Sun travels in a big circle around our planet every day.	
 3. When our side of the Earth faces the Sun, we have daytime.	