





**Second Semester of the Academic Year 1447**

**Worksheet for Week 12**

Name			
Subject	Math	Class	Grade 1

**Q1: Circle the correct answer:**

1	$7 - 2 = \dots\dots\dots$	
	A <input checked="" type="radio"/> 5	B <input type="radio"/> 4
	C <input type="radio"/> 3	D <input type="radio"/> 2
2	$8 - 1 = \dots\dots\dots$	
	A <input type="radio"/> 5	B <input type="radio"/> 6
	C <input checked="" type="radio"/> 7	D <input type="radio"/> 8
3	$9 - 4 = \dots\dots\dots$	
	A <input type="radio"/> 3	B <input type="radio"/> 1
	C <input checked="" type="radio"/> 5	D <input type="radio"/> 4
4	$6 - 2 = \dots\dots\dots$	
	A <input type="radio"/> 1	B <input type="radio"/> 2
	C <input type="radio"/> 3	D <input checked="" type="radio"/> 4

**Q2: Solve the word problem:**

1.  Dona has 9 bananas.  
She gives 4 bananas to her friend.  
How many bananas are left with Dona?



$9 - 4 = \dots$  **5** ..... Bananas left .

