







Second Semester of the Academic Year 1447-2025

Worksheet (5)

| | | | |
|---------|---------|-------|--|
| Level | 2 | Name | |
| Subject | Science | Class | |

First: Circle the correct answer for each of the following.

| | | | |
|---|--|---|---|
| 1 | Which of these is a hill that is smaller and lower than a mountain? | | |
| A |  | B |  |
| | | C |  |
| 2 | On a map, mountains are usually colored | | |
| A | blue | B | green |
| | | C | brown |
| 3 | A round model that shows where land and water are located. | | |
| A | Globe  | B | Map  |
| | | C | Ship  |

Second: Draw a picture of the Earth. Show the air (atmosphere), the land (lithosphere), and the water (hydrosphere).