







Second Semester of the Academic Year 1447-2025

Worksheet (5)

Level	2	Name	
Subject	Science	Class	

First: Circle the correct answer for each of the following.

1	Which of these is a hill that is smaller and lower than a mountain?		
A		B	
		C	
2	On a map, mountains are usually colored		
A	blue	B	green
		C	brown
3	A round model that shows where land and water are located.		
A	Globe 	B	Map 
		C	Ship 

Second: Draw a picture of the Earth. Show the air (atmosphere), the land (lithosphere), and the water (hydrosphere).

