




Second Semester of the Academic Year 1447-2025


Worksheet (6)

Level	1	Name	
Subject	Science	Class	

First: Look at the pictures. Circle the correct answer for each sentence.

1.	<p>What is matter?</p> 	<p>a) Only things we can eat b) Everything that takes up space c) Something we only find in a lab d) The color of an object</p>
2.	<p>Which word describes how an object feels when you touch it?</p> 	<p>a) Size b) Mass c) Color d) Texture</p>
3.	<p>If a ball is round like a circle, which property are you describing?</p> 	<p>a) Shape b) Mass c) Texture d) Gas</p>

Second: Read the sentences. Write (T) if it is True. Write (F) if it is False.

Sentence	True (T) or False (F)
<p>We use the balance scale to find out which object has more mass.</p>  <p>Balance</p>	
<p>Matter only exists as a solid.</p>	